

New
Specification



General Certificate of Secondary Education
2019

Centre Number

--	--	--	--	--

Candidate Number

--	--	--	--

Construction and the Built Environment

Unit 2
Sustainable Construction



GCN21

[GCN21]

MONDAY 10 JUNE, AFTERNOON

TIME

1 hour 30 minutes.

INSTRUCTIONS TO CANDIDATES

Write your Centre Number and Candidate Number in the spaces provided at the top of this page.

Write your answers in the spaces provided in this question paper. Answer **all nine** questions.

Questions **1, 2, 5, 6, 7** and **8** should be answered in relation to the enclosed house drawings and specifications previously issued as pre-release material.

You should not bring any of the material previously issued into this examination.

You will be provided with a clean copy of the pre-release material.

INFORMATION FOR CANDIDATES

The total mark for this paper is 120.

Figures in brackets printed down the right-hand side of pages indicate the marks awarded to each question or part question.

Quality of written communication will be assessed in questions **6** and **9**.

For Examiner's use only	
Question Number	Marks
1	
2	
3	
4	
5	
6	
7	
8	
9	

Total Marks	
--------------------	--

A scale ruler and a calculator are required.

3 Demonstrate your understanding of the following terms and give an example of each to support your answer:

(a) Green Belt

[2]

(b) Conservation Area

[2]

(c) Recycling

[2]

Examiner Only	
Marks	Remark

(d) Retrofit

[2]

(e) Damp Proof Membrane

[2]

Examiner Only	
Marks	Remark

4 Complete a cutting list for the table shown in Fig. 2 below.

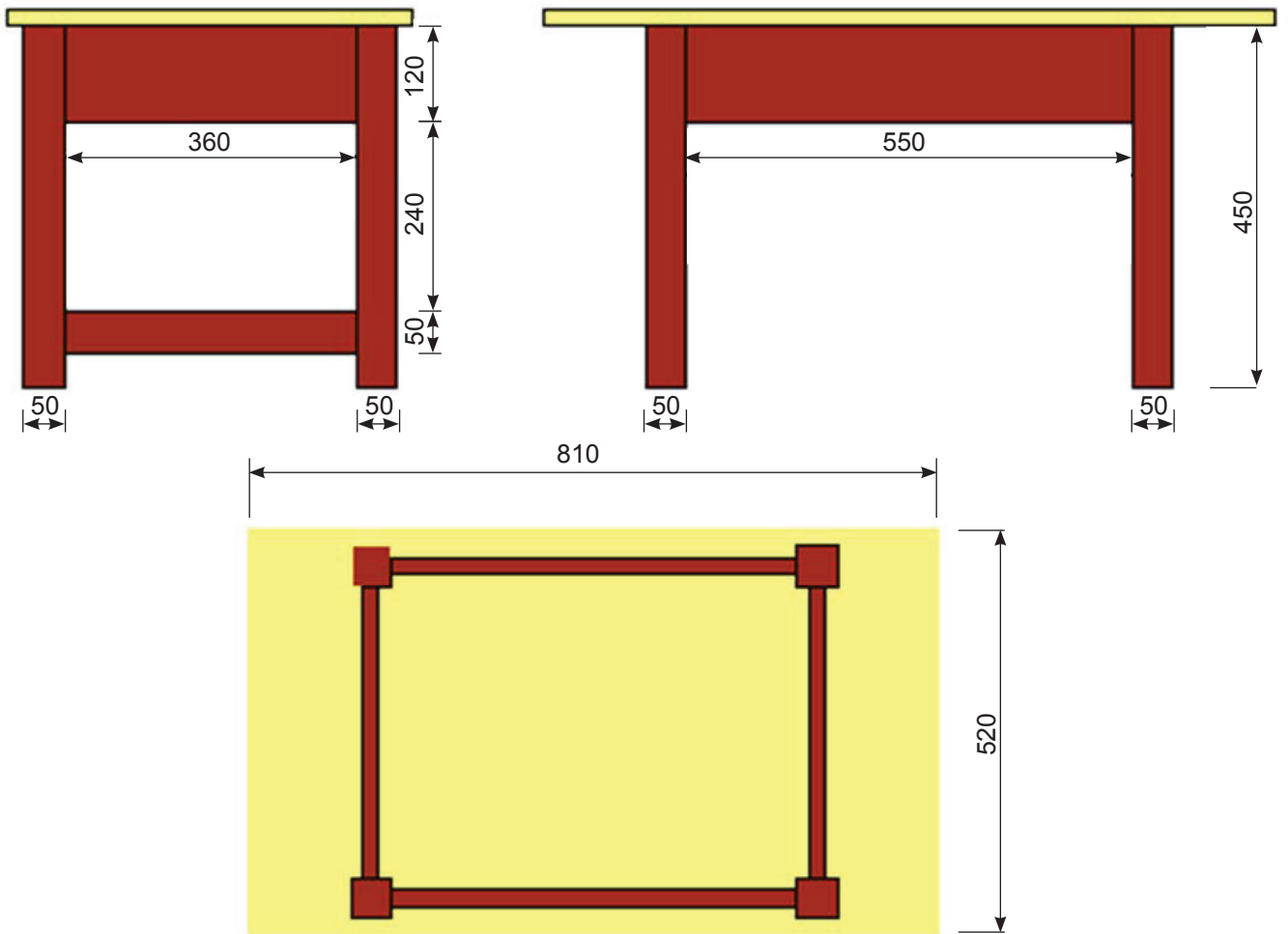


Fig. 2

The cost of the materials to be used in your table is shown below.

The cost of:

- 50 mm square section tulipwood timber is **£5.46** per linear metre.
- Top long rails 120 mm × 18 mm planed all round (PAR) tulipwood timber is **£4.59** per linear metre.
- Top short rails 120 mm × 18 mm planed all round (PAR) tulipwood timber is **£4.59** per linear metre.
- Bottom rails 50 mm × 18 mm planed all round (PAR) tulipwood timber is **£2.97** per linear metre.

Ash faced 18 mm thick MDF costs **£42** for a sheet measuring 2440 mm × 1220 mm. You will be able to cut 6 table tops from one sheet of MDF.

Mortice and Tenon joints are used to join the rails of the table to the legs.

Remember to allow 30 mm each end of the rails for cutting out the Tenon Joints.

Item	Part	Quantity	Description of material required	Length in mm	Width in mm	Thickness in mm	Total length required	Total cost	Examiner Only	
									Marks	Remark
1	Legs	4	Tulipwood	450	50	50	1.8 m		[1]	
2	Long Top Rails	2	Tulipwood						[5]	
3	Short Top Rails	2	Tulipwood						[5]	
4	Short Bottom Rails	2	Tulipwood						[5]	
5	Table Top	1	Ash Faced MDF				6 table tops from one sheet		[4]	
Total cost of glue, connection blocks, varnish etc.								£4.00		
Total cost of table								£	[2]	

Fig. 3

Complete the shaded boxes in the cutting list above.

Additional space is provided on the next page for calculations.

Use this area for calculations where necessary.

BLANK PAGE

(Questions continue overleaf)

8 Fig. 5 shows an incomplete foundation detail which is to be used for the house shown in the pre-release material.

(a) When completing your drawing add the following:

- The cavity
- Damp Proof Membrane
- Sand and cement screed

[3]

Draw in hatch patterns to represent the following:

- Hardcore
- Foundation concrete
- Sand and cement screed
- Inner skin of block work
- Outer skin of block work
- Cavity insulation
- Floor insulation

[7]

(b) Include labels from the list below:

- | | |
|--------------------------|--------------------------------|
| Foundation concrete | Outer skin of block work |
| Inner skin of block work | Inner plaster with skim finish |
| Damp Proof Course (DPC) | Skirting board |
| Floor insulation | Hardcore |
| Cavity insulation | Subfloor concrete |

[10]

Examiner Only	
Marks	Remark

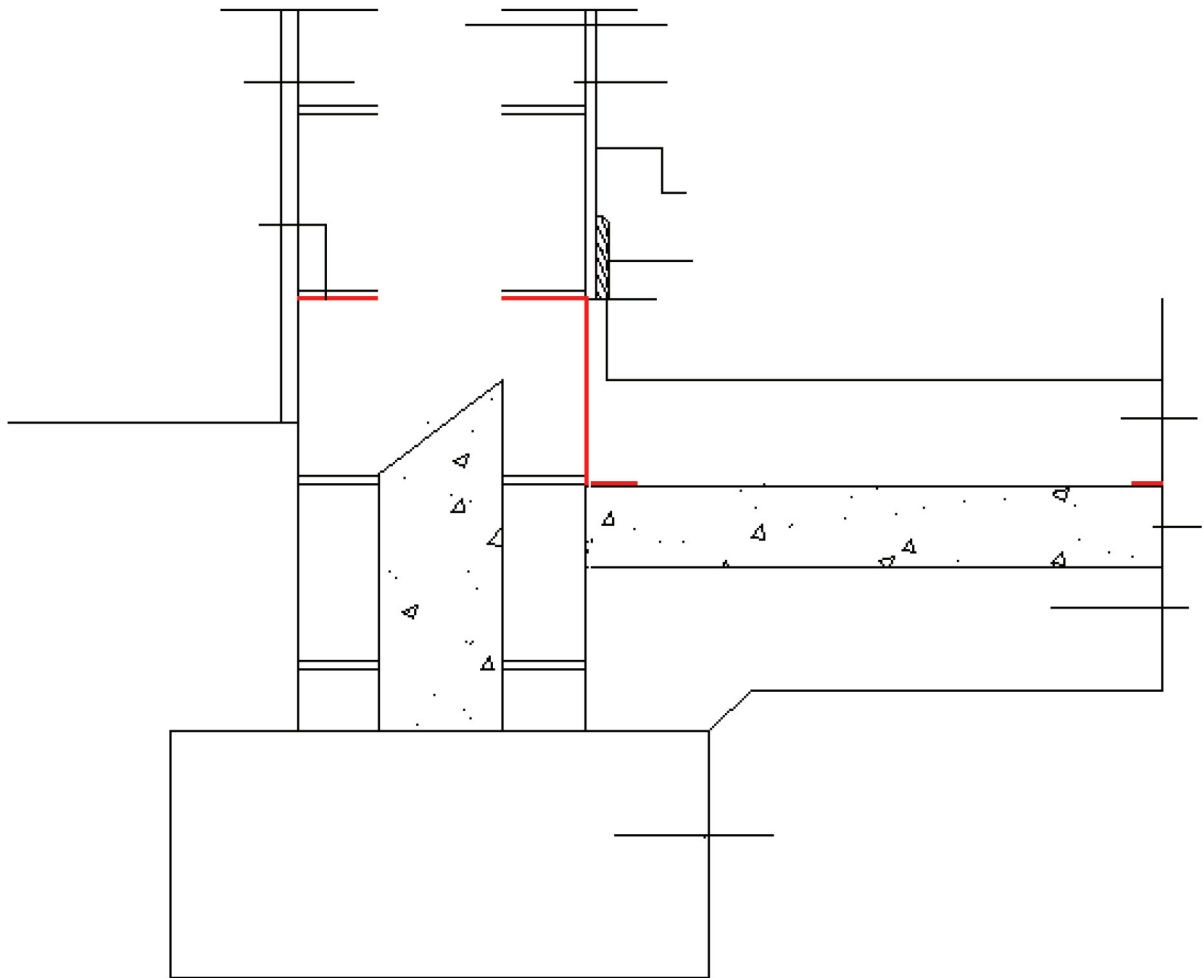


Fig. 5

THIS IS THE END OF THE QUESTION PAPER

Permission to reproduce all copyright material has been applied for.
In some cases, efforts to contact copyright holders may have been unsuccessful and CCEA
will be happy to rectify any omissions of acknowledgement in future if notified.

New
Specification



General Certificate of Secondary Education
2019

Construction and the Built Environment

Unit 2

Sustainable Construction

[GCN21]

MONDAY 10 JUNE, AFTERNOON

INFORMATION FOR CANDIDATES

A copy of the pre-release information for this examination is included in the following pages.

You must use this clean copy of the Pre-release Material in the examination and not your own annotated copy.

Introduction

A copy of the pre-release material for this examination is included in this paper and five associated drawings.

The pre-release material contains drawings and specifications relating to a house which is to be constructed within a housing development. A range of different house types will be constructed within this development including detached, semi-detached and terrace housing.

An existing row of terrace houses is to be retained and refurbished. As part of the retrofit requirements, **the terrace houses require to have new hard wood windows fitted. The inner wall will be drylined to prevent the passage of damp and incorporate high specification 150 mm thick insulation.**

The developer is very keen to explore sustainable methods of generating energy.

Specification

Cavity wall construction

Outer leaf: 100 mm concrete block, 150 mm cavity fill insulation, held in position using stainless steel insulation retaining wall ties to BS 1243.

Inner leaf: 100 mm block work. Provide sand/cement plaster and carlite finish to inner face. 25 mm insulation to all jambs, between lintels and behind sill. D.P.C. in front of insulation in each case.

Solid floor construction

Seal all floors with two coats of penetrating liquid dust proofer, 100 mm fine aggregate screed, 150 mm high density floor insulation. Visqueen 1200 grade D.P.M., 100 mm concrete sub-floor, 150 mm consolidated hard-core.

Damp proof course

Vertical D.P.C. to all window and external door jambs, horizontal D.P.C. behind and under sills and stepped lintels. Wall D.P.C. to external skin, layers at 150 mm minimum above finished ground levels.

D.P.C. to internal walls to overlap and be bonded to floor D.P.M. by a minimum of 215 mm.

Foundations

650 mm × 300 mm foundations to 350 mm walls.

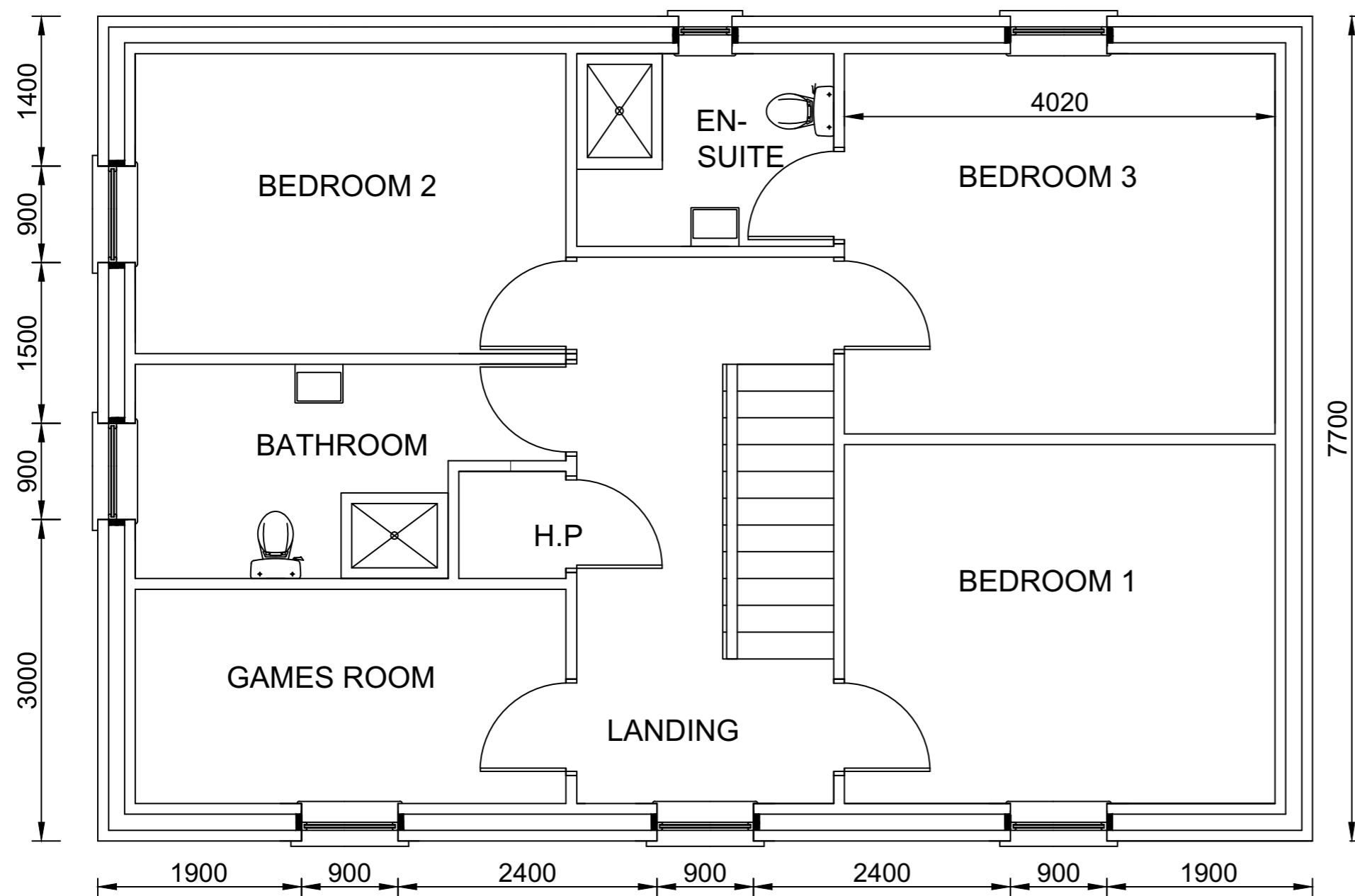
450 mm × 300 mm foundations to 100 mm walls.

The above to be concrete strip foundations. The size and depth of foundations shown to be determined and agreed with Building Control when sub-soil bearing pressures are known.

Cavity fill to external walls to stop a minimum of 150 mm below D.P.C.

NOTE Students will require the use of a scale ruler and a calculator during the examination.

Permission to reproduce all copyright material has been applied for.
In some cases, efforts to contact copyright holders may have been unsuccessful and CCEA
will be happy to rectify any omissions of acknowledgement in future if notified.

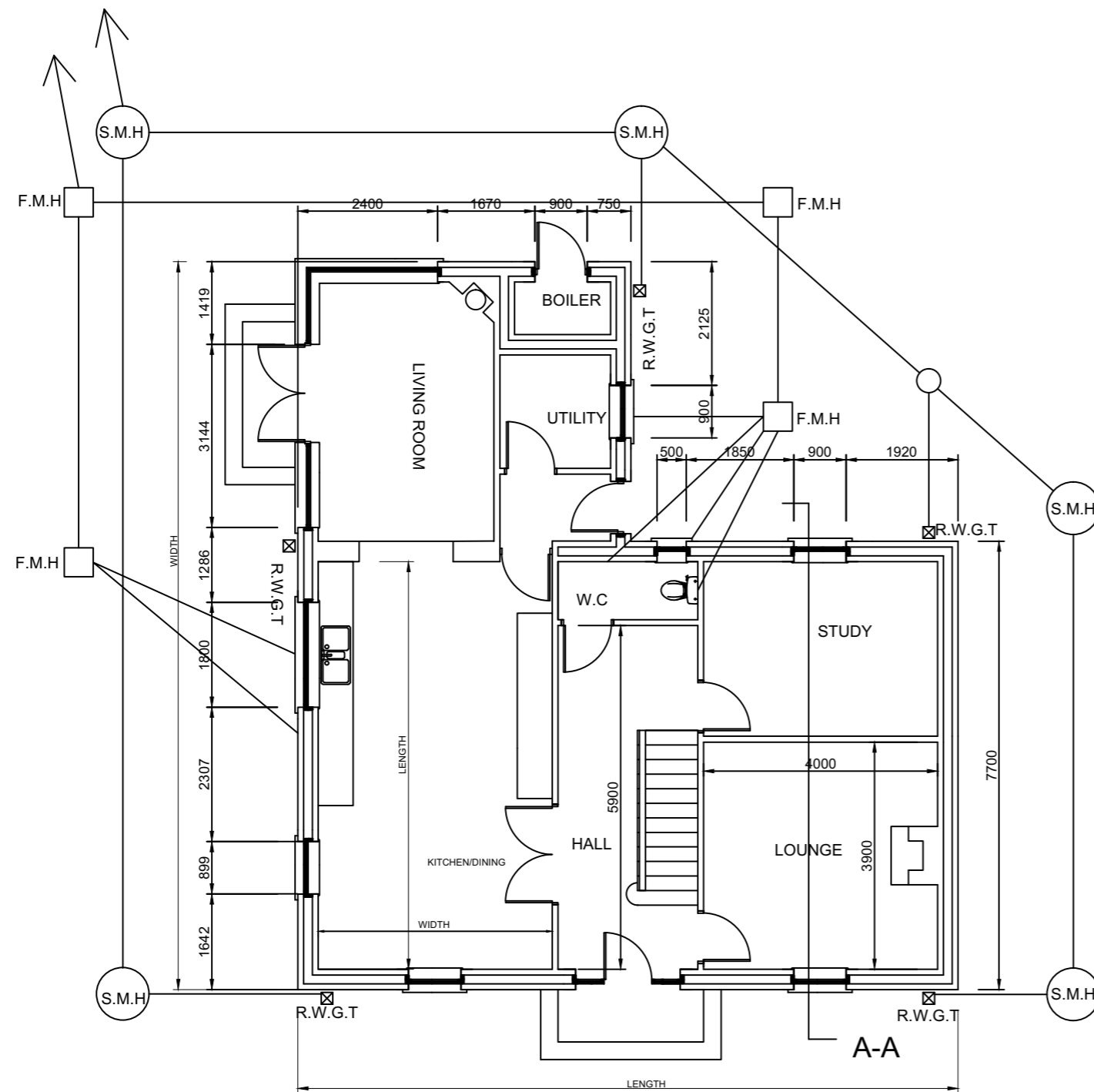


FIRST FLOOR PLAN

GCSE Construction and the Built Environment

Plan View Drawing No 1

Unit 2
Pre-release material
Summer 2019
SCALE: 1: 50

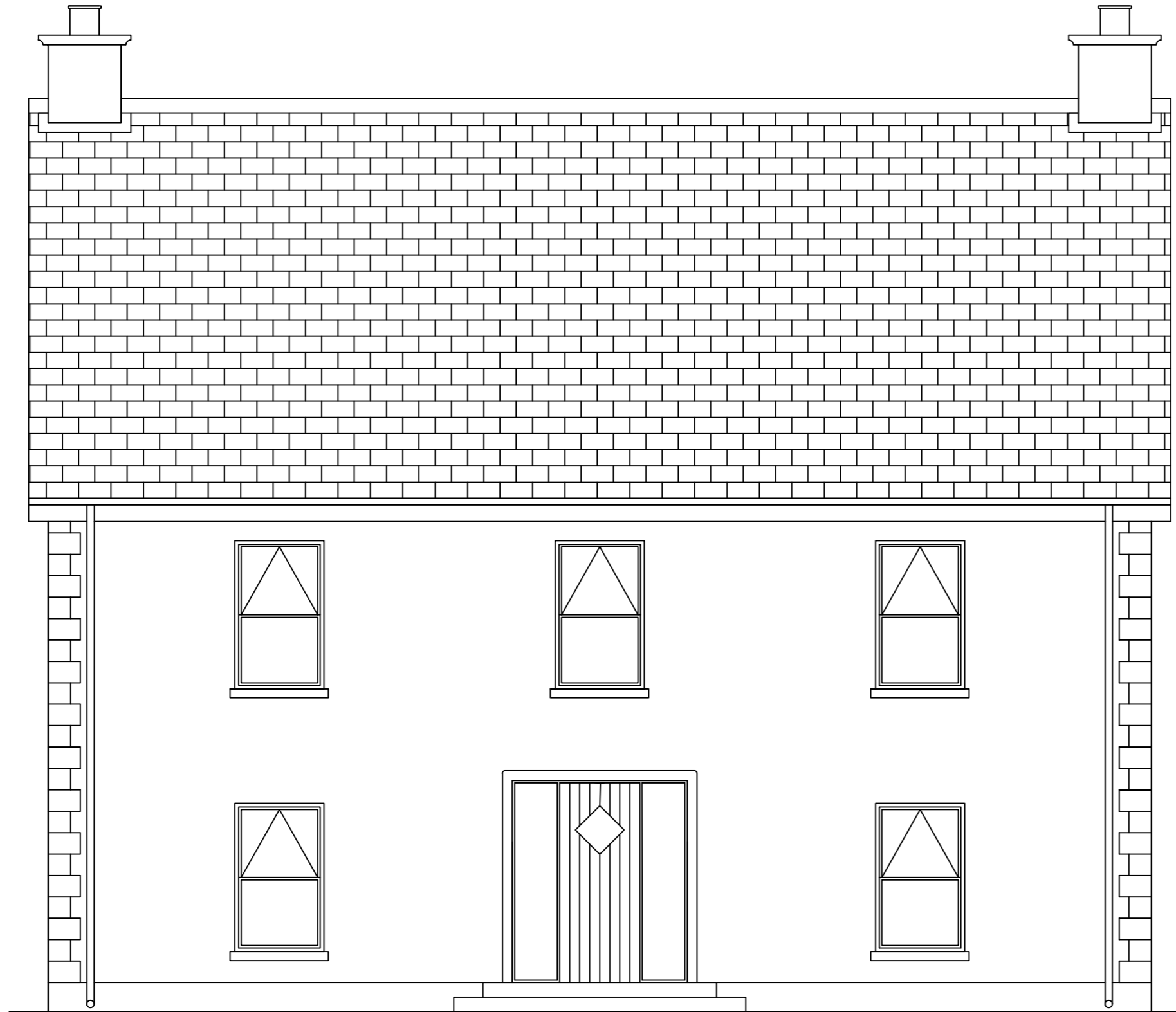


GROUND FLOOR PLAN

GCSE Construction and the Built Environment

Plan View Drawing No 2

Unit 2
Pre-release material
Summer 2019
SCALE: 1: 100



**GCSE Construction and the
Built Environment**

Front View Drawing No 3

Unit 2
Pre-release material
Summer 2019
SCALE: 1: 50



REAR ELEVATION

**GCSE Construction and the
Built Environment**

Rear Elevation Drawing No 4

Unit 2
Pre-release material
Summer 2019
SCALE: 1: 50



SIDE ELEVATION

**GCSE Construction and the
Built Environment**

Side Elevation Drawing No 5

**Unit 2
Pre-release material
Summer 2019
SCALE: 1: 50**

